

Name: _____

Period: _____ Date: _____

Key: What do each of these initials mean?

BC: _____ BCE: _____

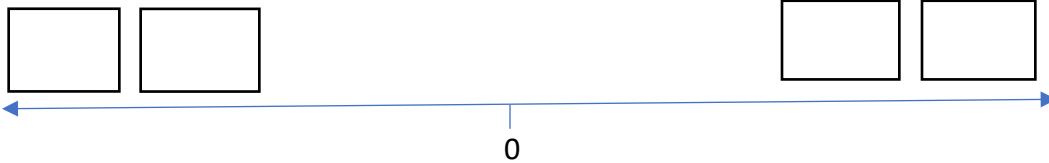
AD: _____ CE: _____

Highlight both BC and BCE in the one color

Highlight both AD and CE in another color

Timeline Practice

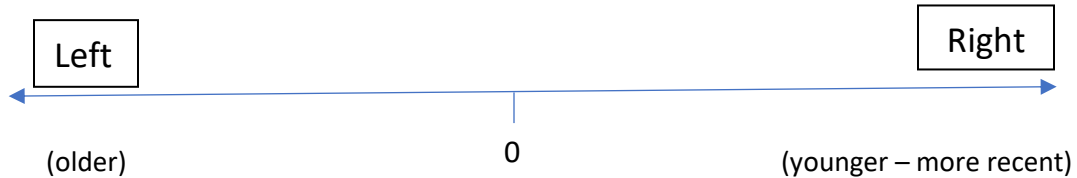
1. Label the blanks with AD, CE, BCE, BC



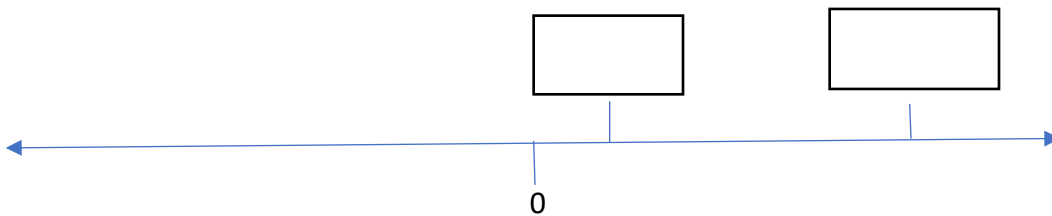
2. Circle the right answers

a. As the numbers go toward the left on a timeline, they get (larger, smaller)

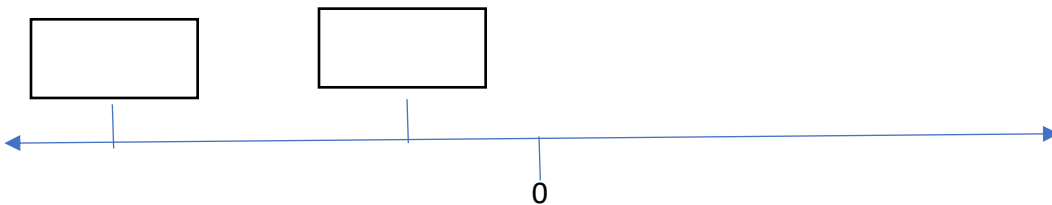
b. As the numbers go toward the right on a timeline, they get (larger, smaller)



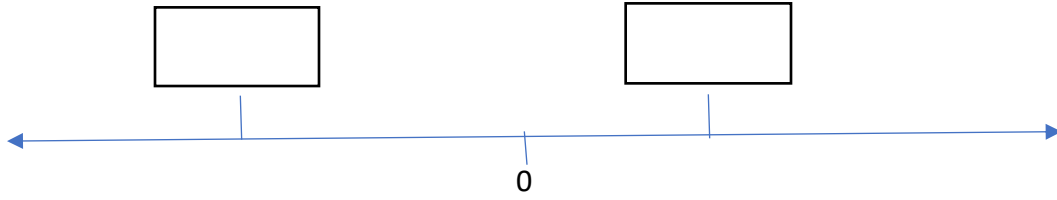
3. Place these dates on the timeline: AD 700, 80 CE



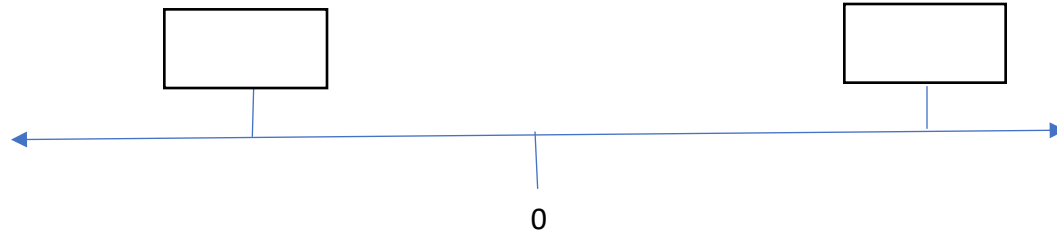
4. Place these dates on the timeline: 100 BC, 900 BCE



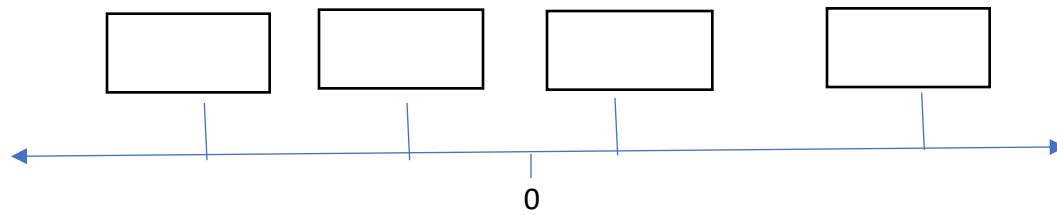
5. Place these dates on the timeline: 650 BCE, AD 230



6. Place these dates on the timeline: 860 CE, 540 BC



7. Place these dates on the timeline: AD 45, 600 BC, 120 BCE, 980 CE



8. Order these from what came first to last:

- a. AD 450, 830 CE, 150 CE, AD 340 –
- b. 35 BC, 560 BCE, 280 BCE, 710 BC –
- c. AD 930, 320 BC, AD 110, 480 BC –
- d. 120 BCE, 95 CE, 530 CE, 540 BCE –
- e. AD 27, 270 BCE, 54 BC, 540 CE –